

Candidate Name

Centre Number

Candidate Number

**ZIMBABWE REPUBLIC POLICE EDUCATION SECTION  
GRADE 6 END OF YEAR EXAMINATION 2013**

**GENERAL PAPER  
PAPER 2**

**NOVEMBER 2013**

**Time: 1 hour 30 min**

**INSTRUCTIONS TO CANDIDATES**

**Section A**

Answer question **1** and any **two** other questions. Write your answers in the spaces provided on the question paper.

**Section B**

Answer any **three** questions. Write your answers in the spaces provided on the question paper.

**Section C**

Answer any **three** questions. Write your answers in the spaces provided on the question paper.

**FOR EXAMINER'S USE**

<b>Section A</b>	
1	
2	
3	
4	
<b>Section B</b>	
5	
6	
7	
8	
9	
<b>Section C</b>	
10	
11	
12	
13	
<b>TOTAL</b>	

**This question paper comprises 7 printed pages.**

**SECTION A**

*There are four questions in this section.*

*Answer question 1 and any other two.*

**Read the following passage and answer questions that follow.**

The bus conductor was a rough looking young man. He had no respect for elders. He pulled and shoved them in and out of the bus with their luggage. He also used bad language. The bus conductor overcharged passengers in order to get money for his beer. The people finally said, "Enough is enough." They complained to the bus owner who fired him there and then. Nobody felt sorry for him.

1.

a) List the three bad things this conductor did.

- i. ....[1]
- ii. ....[1]
- iii. ....[1]

b) Why did the people not feel sorry for the bus conductor when he was fired?

.....  
.....[1]

2.

a) Who led the Israelites from Egypt to Canaan?

..... [1]

b) Pharaoh did not allow the Israelites to go. What made him let them go at last?

..... [1]

c) What led them during the night?

..... [1]

d) Only two adults entered Egypt from Canaan. Who were they?

..... [2]

- 3.
- a) Which two religions allow their followers to eat pork?  
..... [2]
  - b) Which religion does not have a holy book?  
..... [1]
  - c) What is the worshiping place for Jews called?  
..... [1]
  - d) Who started the Islamic religion?  
..... [1]
- 4.
- a) Who was Joseph's only young brother?  
..... [1]
  - b) What made Joseph's brothers sell him?  
..... [1]
  - c) When do Christians remember the death of Jesus?  
..... [1]
  - d) How did Jacob show that he favoured Joseph more than his other sons?  
..... [1]
  - e) Which country did Potiphar come from?  
..... [1]

**SECTION B**

*There are five questions in this section. Answer any **three** questions*

5.

- a) Who were the two sons of Mutapa Gatsi Rusere?  
..... [2]
- b) Why did Mamvura change his name to Lord James?  
.....  
.....  
.....[1]
- c) State any one cause of the first Chimurenga (1896-1897).  
.....  
.....[1]
- d) King Lobengula signed the Rudd Concession, one agreement included in the document that was never fulfilled is;  
.....  
.....  
.....[1]

6.

- a) What are illegal settlers living in shacks called?  
..... [1]
- b) Which people built their houses ice blocks?  
..... [1]
- c) Which Pharaoh built the biggest pyramid in Egypt?  
..... [1]
- d) The most famous Greek temple was the.....  
..... [1]
- e) Round grass-thatched huts are usually found in.....  
.....[1]

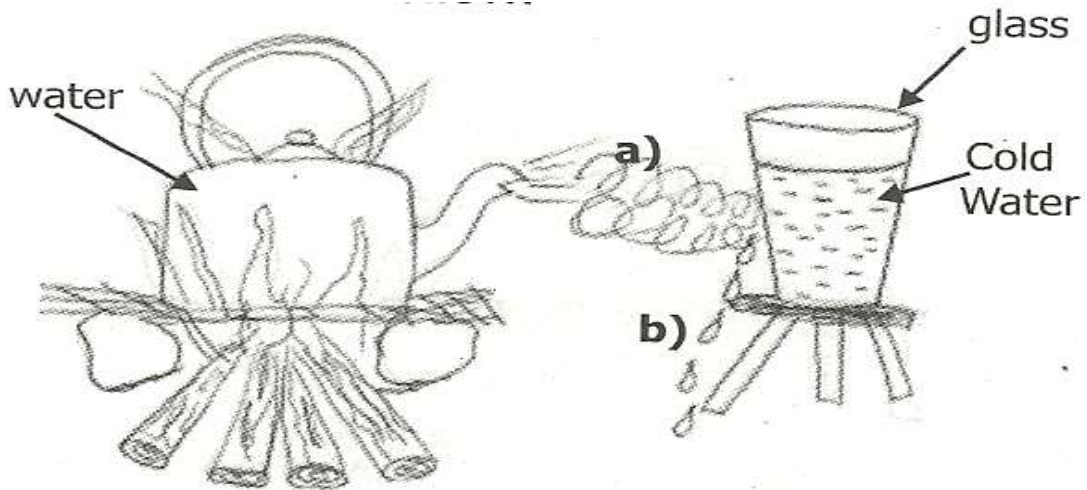
- 7.
- a) Which country colonized Zimbabwe?  
..... [1]
  - b) Who formed the British South Africa Company?  
..... [1]
  - c) 

<b>Colonial Name</b>		<b>New Name</b>
Fort Salisbury	.....	[1]
  - d) Name two spirit mediums of the first Chimurenga  
..... [2]
- 8.
- a) Sugar and salt solution is given to a person suffering from  
.....[1]
  - b) Why is it important to boil water from an unprotected source?  
.....[1]
  - c) What does lack of iron in the body cause?  
.....[1]
  - d) Diseases spread from animals to people are called  
.....[1]
  - e) In which part of the body is the brain situated?  
.....[1]
- 9.
- a) Name any **two** materials used to make nylon.  
..... [2]
  - b) Name **one** man-made fabric you know.  
..... [1]
  - c) What is the national dress for Indian women?  
..... [1]
  - d) A place where cloth is manufactured is called a  
.....[1]

**SECTION C**

*There are four questions in this section. Answer any three.*

**STUDY THE DIAGRAM BELOW AND USE IT TO ANSWER QUESTION 10**



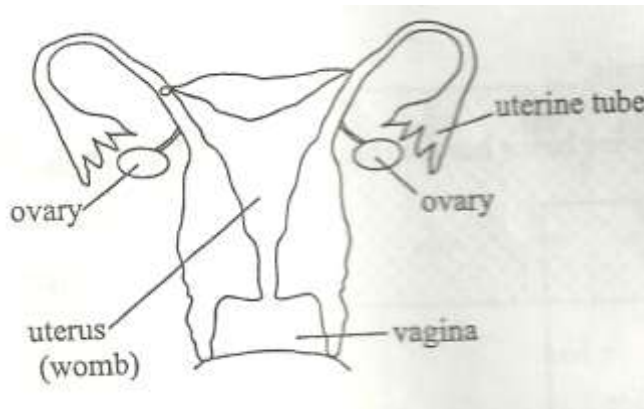
10.

- a) (i) What state is the substance marked **a)**?  
..... [1]
- (i) What do we find on **b)**?  
..... [1]
- b) What happened when substance marked **a)** got into contact with a glass of cold water.  
..... [1]
- c) What is the boiling point of water?  
..... [1]
- d) Water can be found in three states. What are these?
  - (i) .....
  - (ii) .....
  - (iii) ..... [3]

11

- a) What is weathering?  
.....  
..... [1]
- b) Name three agencies of weathering.
  - i. ....
  - ii. ....
  - iii. .... [3]
- c) Grass prevents the washing away of soil by rain. The washing away of top soil by rain is  
..... [1]
- d) List two types of soil.
  - i. ....
  - ii. .... [2]

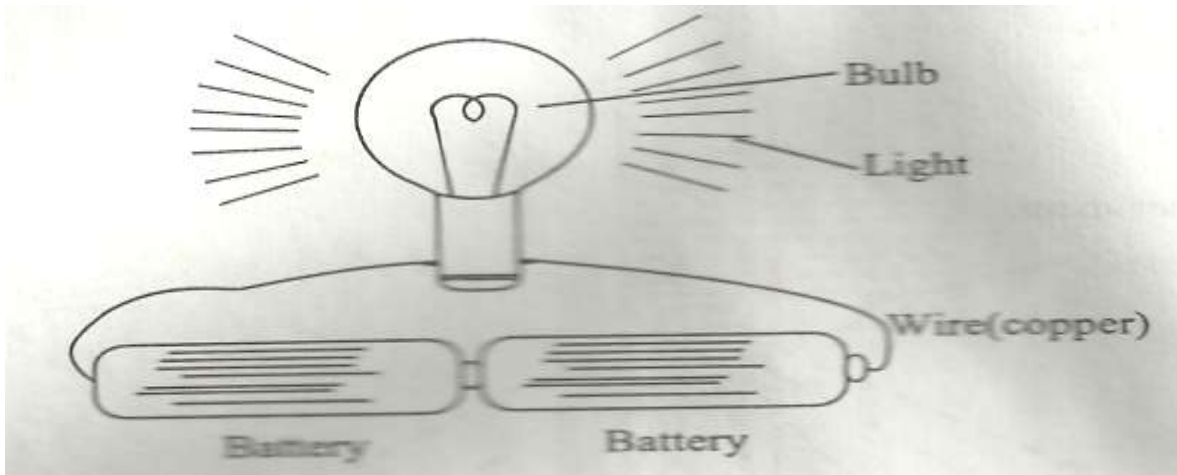
12. STUDY THE DIAGRAM BELOW AND USE IT TO ANSWER QUESTION 12



- a) From which part is an egg produced each month?  
..... [1]
- b) When an egg is not fertilized by the male's sperm what happens?  
..... [1]
- c) Why should a woman be free from the HIV virus when pregnant?  
..... [1]
- d) Which organ makes sperms?  
'..... [1]
- e) How many sperms are needed to fertilize one egg?

- ..... [1]
- f) In the female reproductive system where does fertilization take place?  
..... [1]
- g) State one way of preventing the spread of STDs.  
..... [1]

13. STUDY THE DIAGRAM BELOW AND USE IT TO ANSWER QUESTIONS THAT FOLLOW



- a) Which two points should be connected for the bulb to light?  
..... [2]
- b) What happens if you remove the copper wire?  
..... [1]
- c) Complete the following energy changes that take place when the bulb lights.
- Chemical Energy  $\Rightarrow$  Electrical Energy  $\Rightarrow$    
 $\Rightarrow$
- ..... [2]
- d) A solar panel converts energy from the sun into -----  
energy. [1]
- e) Name one appliance which converts electrical energy into sound energy.  
..... [1]



**GRADE SIX GENERAL PAPER 2 ANSWERS**

**SECTION A.**

1

- a) (i) no respect [1]
- (ii) used bad language [1]
- (iii) overcharging [1]
- b) He was a bad conductor.

2.

- a) Moses [1]
- b) Dying of the first borns [1]
- c) A pillar of fire [1]
- d) Caleb and Joshua [2]

3.

- a) ATR , Christianity, Hinduism [2]
- b) ATR [1]
- c) Synagogue [1]
- d) Prophet Mohammed [1]

4.

- a) Benjamin [1]
- b) Jealousy [1]
- c) Good Friday (**not Easter**) [1]
- d) He bought/gave him a colourful coat [1]
- e) Egypt [1]

**SECTION B**

5.

- a) Nyambo Kapararidze and Mamvura [2]
- b) He changed when he became a Christian [1]
- c) Loss of land / loss of cattle / forced labour / taxes [1]
- d) **Rudd Concession**; the British would give Lobengula a riverboat/gunboat. [1]

6.

- a) squatters [1]
- b) Eskimos [1]
- c) King Qeopes [1]
- d) Pantheon [1]
- e) Rural areas [1]

7.

- a) Britain [1]
- b) Cecil John Rhodes [1]
- c) Harare [1]
- d) Mbuya Nehanda and Sekuru Kaguvi [2]

8.


- a) Diarrhea [1]

- b) To kill germs [1]  
 c) anaemia [1]  
 d) zoonosis [1]  
 e) head [1]
9.  
 a) coal/ air/ water (any two) [2]  
 b) nylon/ terylin/canvas/rexin/polyester/plastic [1]  
 c) Indian sari [1]  
 d) textile [1]
- SECTION C**
10.  
 a) i. steam/water vapour [1]  
     ii. Liquid water drops [1] [2]  
 b) it condenses [1]  
 c) 100<sup>0</sup> C [1]  
 d) i. solid,  
     ii. liquid  
     iii. gas [3]
11.  
 a) Weathering; the breaking down of rocks to form soil [1]  
 b) i. water/rain  
     ii. temperature changes  
     iii. tree roots  
     iv. animals using the same track  
     v. chemical reactions (any three) [3]  
 c) Erosion [1]  
 d) i. loam soil  
     ii. sand soil  
     iii. clay soil [1]
12.  
 a) ovary [1]  
 b) it dies/there is no fertiization [1]  
 c) so that she does not infect the child [1]  
 d) testis [1]  
 e) one [1]  
 f) oviduct/egg tube/ fallopian tube [1]  
 g) abstinence/being faithful to one sexual partner/ careful and correct use of condoms [1]
13.  
 a) positive and negative terminals [1]

b) the light will go out/the circuit becomes incomplete

[1]

[1]

c) heat energy  light energy

[2]

d) electrical

[1]

e) radio/television etc

[1]