

**ZIMBABWE REPUBLIC POLICE EDUCATION SECTION
GRADE 6 MIDYEAR EXAMINATIONS 2015**

**GENERAL PAPER
PAPER 2**

July 2015

Time:1 hour 30 min

INSTRUCTIONS TO CANDIDATES

Section A

Answer question **1** and any **two** other questions. Write your answers in the spaces provided on the question paper.

Section B

Answer any **three** questions. Write your answers in the spaces provided on the question paper.

Section C

Answer any **three** questions. Write your answers in the spaces provided on the question paper.

FOR EXAMINER'S USE	
Section A	
1	
2	
3	
4	
Section B	
5	
6	
7	
8	
9	
Section C	
10	
11	
12	
13	
TOTAL	

SECTION A

There are four questions in this section.

Answer question 1 and any other **two** questions in the spaces provided on the question paper.

READ THE FOLLOWING PASSAGE AND ANSWER THE QUESTIONS.

Lindiwe had become a Christian only a few weeks before her birthday. It happened the day she asked Jesus to forgive her sins and make her a child of God. But Lindiwe had told nobody in her family about this. She was afraid because her father was always drunk and her mother never gave her the chance to tell her. Then on her twelfth birthday, her father came home drunk in the evening. During supper her father gave her a can of beer to drink. Lindiwe was so terrified and surprised that she did not know what to do. She told her father politely that she could not drink the beer.

- 1.(a) When had Lindiwe become a child of God?
.....[1]
- (b) Why did Lindiwe not tell her family about her becoming a Christian?
..... [1]
- (c) What word best describes Lindiwe’s father?
.....[1]
- (d) What did Lindiwe do to show that she was a Christian?
..... [1]

[Total 4]

- 2a) What do Christians call their Holy Book?
.....[1]
- (b) What name is given to the Jewish God?
.....[1]
- (c) Name the place of worship for:
 - (i) Muslims
.....[1]
 - (ii) Hindus
.....[1]

(d) Who was asked to kill Isaac as a sacrifice for God?
.....[1]

[Total 5]

3a. How can broken friendship be mended?
.....[2]

b. A person who believes that there is no God is called an
.....[1]

c).Which religion takes a cow as a sacred animal?
.....[1]

d. African Traditional Religion believers communicate to God through
.....[1]

[Total 5]

4 a) Who helped Jesus to carry the cross to the place of crucifixion?
..... (1)

b) Jesus entered Jerusalem riding a colt, what did that represent?
..... (1)

c) Who were the people referred to as Gentiles?
..... (1)

d) When people turn away from their sins and believe in God, they have
..... (1)

e) The disciple who denied Jesus three times is..... (1)

[Total 5]

SECTION B

There are five questions in this section, answer any three questions in the space provided on the question paper.

5a. Why do people migrate from rural to urban areas in Zimbabwe?
..... [1]

b. State one right of a Zimbabwean citizen.
..... [1]

c. The Ndebele king who was tricked to sign the Rudd Concession was
..... [1]

d. Great Zimbabwe was built by the.....people. [1]

e. Who was the founder of Mutapa state?

..... [1]

6. a) What is a balanced diet?

..... (1)

b) Give one example of a perishable food. (1)

c) Maize, millet, wheat and rapoko are all (1)

d) One method of preserving food is..... (1)

e) We get protein from..... (1)

7 (a) Complete the table below

<u>CROP</u>	<u>PRODUCT</u>
i) Sugarcane
ii).....	Flour

(2)

(b) The food commonly eaten by people in a country is their

..... (1)

(c) Lack of protein in children causes a disease called

..... (1)

(d) Which domestic animal can be affected by a disease called anthrax?

..... [1]

(e) What does calcium helps us in our bodies?

..... (1)

8(a) State one right of a citizen.

..... (1)

(b) Laws that are made by the Local Authority are known as

..... (1)

(c) Which type of toilet is suitable in the rural areas?

..... (1)

(d) Complete the table below

Skilled worker	Unskilled worker
i)..... (1)	i).....(1)

9(a). What do we call the trade whereby people trade goods for goods?
..... (1)

(b). Which is the safest place to keep your money?
..... (1)

(c). Give one example of a weapon which was used by hunters long ago?
..... (1)

(d). Why are leisure activities important?
..... (1)

(e). In which country are pyramids found in Africa?
..... (1)

SECTION C

There are four questions in this section. Answer any three questions.

10.(a) Give one property of water?
..... (1)

(b) Complete the table

Changing state	Process
ice to liquid

(1)

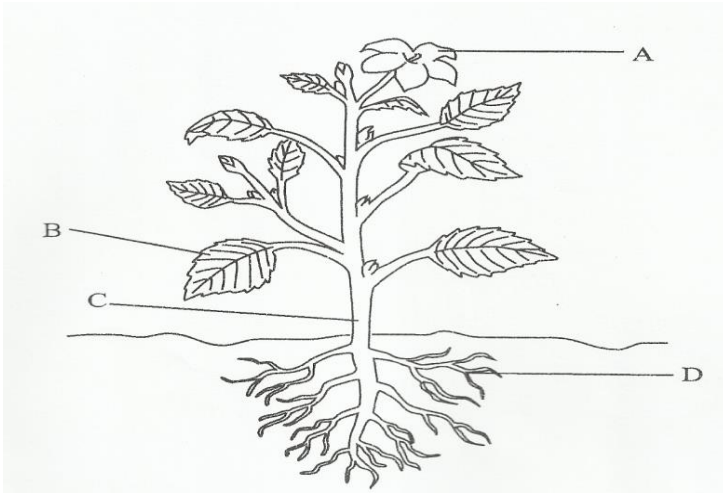
(c). How can we make water safe for drinking?
.....(1)

(d). Give two uses of water?
.....(2)

(e). When water vapour cools it..... (1)

(f). Name one animal that lives in water? (1)

11. Study the diagram of a plant.



- a) Label the parts marked A, B and D
A.....
B.....
D.....3]

b). Plants make food through a process called?
.....

c) Plants lose water through a process called.....[2]

d) The green colour on plants is known as.....[1]

e) Animals which mainly feed on grass are known as [1]

12a) Water borne diseases are diseases we get from dirty water. Name any two water borne diseasesand..... (2)

b) State two causes of soil erosion.
.....and..... (2)

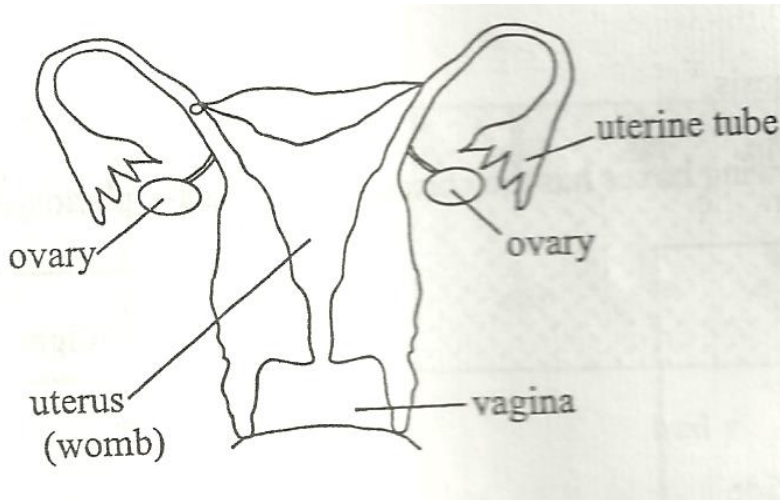
c) Trees which grow in our country naturally are called..... (1)

d) Complete the table below by giving an example of each type of tree.

Indigenous Tree	Exotic Tree
(i).....	(i).....

[2]

13. The diagram below shows the female reproductive system.



a) After fertilisation, where is the foetus kept to grow? [1]

.....

b) The male sex cells are called..... [1]

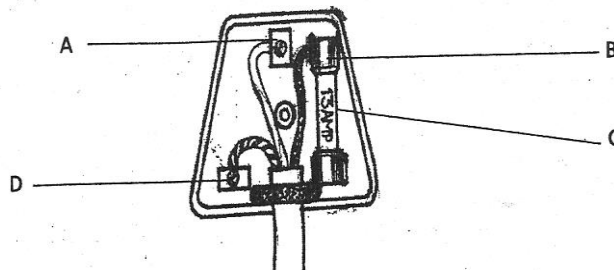
c) What is fertilization?

.....

.....[2]

d) Which insect helps in pollinating plants[1]

e) The diagram below shows a three pin plug. Name the part labeled C.



..... (1)

- g) What is used to show directions on a map? (1)
- 14a) A habitat must provide and (2)
- b) What time should we water vegetables to have less evaporation?
..... (1)
- c) Give one reason why we eat food.
..... (1)
- d) Give any two agents of pollination and..... (2)
- e) A condition caused by lack of the right amount of all nutrients in the body is called (1)