

HOME BASED
GRADE 7 EXAMINATION 2020

GENERAL PAPER
PAPER 2

SEPTEMBER 2020

Time: 1 hour 30 min

INSTRUCTIONS TO CANDIDATES

Section A

Answer question **1** and any **two** other questions. Write your answers in the spaces provided on the question paper.

Section B

Answer any **three** questions. Write your answers in the spaces provided on the question paper.

Section C

Answer any **three** questions. Write your answers in the spaces provided on the question paper.

FOR EXAMINER'S USE	
Section A	
1	
2	
3	
4	
Section B	
5	
6	
7	
8	
9	
Section C	
10	
11	
12	
13	
TOTAL	

This question paper comprises 8 printed pages.

Copyright: HOME Education Section 2020

Section A

Answer question **1** and any **two** other questions. Write your answers in the spaces provided on the question paper.

Read the following passage and answer questions that follow

Timothy Mpofu came from a very big family. He lived with his parents, grandparents, aunts, uncles, his brothers and cousins. After the death of his father, his cousins took everything and did not leave anything for him. His sister Kudzai was beaten up when she complained. On his arrival from South Africa he found his towel wet and barked angrily, “Who is using my property without my permission?” Before they could answer he drew his shotgun and fired at Simba, his elder cousin who had taken a lion’s share of his late father’s property.

- 1a) Which type of family is Timothy’s family?
----- (1)
- b) What usually happens when family members fail to communicate?
----- (1)
- c) A wet towel led to the conflict. What was the real cause of the conflict?
----- (1)
- d) If you were Timothy how would you solve this problem?
----- (1)

- 2 Give the names of the following:
 - a) Who was the wisest king in Israel?
----- (1)
 - b) The first man to be created by God.
----- (1)
 - c) The garden where the first man lived.
----- (1)
 - d) The wife of the first man.
----- (1)
 - e) God’s friend who was promised to be the father of all Nations.
----- (1)

3 a) What guided the wise men from the East to where Jesus was born?

------(1)

b) In which town was Jesus born?

------(1)

c) How did the shepherds come to know about Jesus' birth?

------(1)

d) How did God fulfill his promise of the Holy Spirit?

------(1)

e) Why had Jesus' parents visited the town where Jesus was born?

------(1)

4

a) Where was Mother Therssa born?

------(1)

b) At what age did Mother Therssa start working as a nun?

------(1)

c) Name two pairs of Jesus's disciples who were brothers.

------(2)

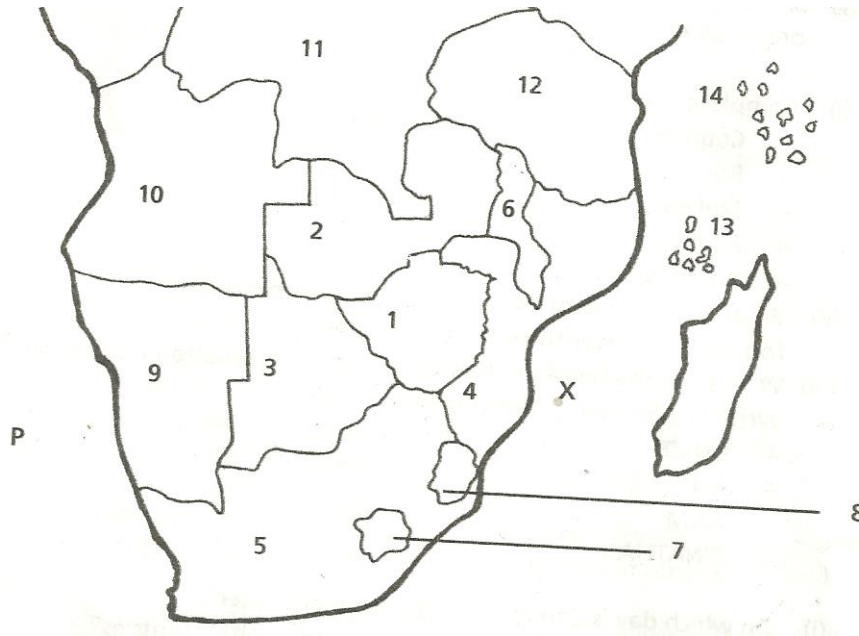
d) The name Barnabas means.

----- (1)

Section B

Answer any **three** questions. Write your answers in the spaces provided on the question paper.

Study the map below and use it to answer the following questions.



5 a) On the map name the country that is completely surrounded by South Africa?
..... (1)

b) Which oceans do the following letters represent?
(i) P-----
(ii) X----- (2)

c) Which countries do the following numbers represent?
(i) 1 -----
(ii) 2 ----- (2)

6 a) What is the staple food in Zimbabwe?

----- (1)
b) State two characteristics of a staple food.

(i) -----

(ii) ----- (2)

c) Why are staple foods different in many countries?

----- (1)
c) What is the function of mineral salts in the body?

----- (1)

7 a) What is the common type of rural shelter in Zimbabwe?

----- (1)
b) Which two factors will influence the type of shelter in an area?

(i) -----

(ii) ----- (2)

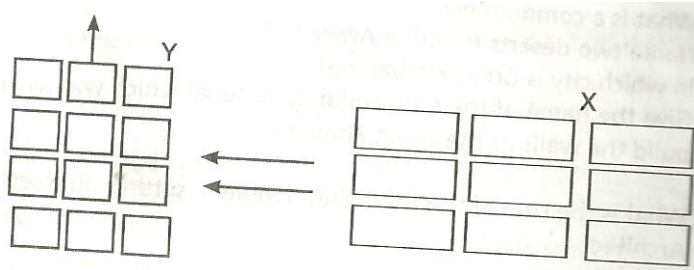
c) Great Zimbabwe is a national monument built near the city of

----- (1)

d) Name the only building material that was used to build Great Zimbabwe Ruins?

----- (1)

Study the diagram below and use it to answer questions that follow?



8 a) What is the direction of the wind?

----- (1)

b) What is the best place for the following:

(i) Industrial Area -----

(ii) Residential Area ----- (2)

c) What environmental problem would be experienced if the industrial area is placed at X?

----- (2)

9 a) George was born in Mozambique when his Zimbabwean parents were refugees.
George is a Zimbabwean by

----- (1)

b) State two causes of the Second War of Liberation in Zimbabwe

(i) -----

(ii) ----- (2)


c) Name two National Forces who joined hands to liberate Zimbabwe from colonial rule.

----- (2)

Section C

Answer any **three** questions. Write your answers in the spaces provided on the question paper.

A Grade 6 pupil set up the experiment as shown below. Study the diagram and answer the questions that follow.



10. a) In which state is water at B, C and D

B -----

C -----

D -----(3)

b) Name the process of purifying water shown above.

----- (2)

c) What is the source of energy in the above experiment?

----- (1)

d) What form of energy causes water to boil in the above experiment?

-----(1)

Study the diagram below and answer questions that follow.



11. a) Which diagram shows a

(i) female egg? ----- (1)

(ii) sperm ----- (1)

b) What name is given to the fusion of the male and female sex cells in the womb?

----- (1)

c) State one way of preventing pregnancy?

----- (1)

d) What is a foetus?

----- (1)

e) What is the function of the umbilical cord.

----- (1)

f) State any two STDs that cannot be cured?

(i)-----

(ii) ----- (2)

12.a) Why should electric appliances be switched off when there is lightning?

----- (1)
b) What is the use of a fuse in an electric plug?

----- (1)
c) What happens when uncovered electric wires touch each other?

----- (1)
d) Complete the following table on colours of electric wires.

Wire	Colour
live	
neutral	
earth	

(3)
e) State one way of saving electricity at home.

----- (1)

13. a) What is friction?

----- (1)

b) State two ways of reducing friction.

----- (2)

c) Identify two ways in which friction can be useful.

----- (2)

d) Give an example of a simple machine.

----- (1)

e) What is a machine?

----- (1)