

**ZIMBABWE REPUBLIC POLICE EDUCATION SECTION  
GRADE 7 MOCK EXAMINATIONS 2015**

**GENERAL PAPER**

**Paper 1**

**SEPTEMBER 2015**

**Time: 2 Hours**

**Instruction to candidates**

- **Read all questions carefully.**
- **Do not open this booklet until you are told to do so by the invigilator.**
- **If you do not understand the instructions ask the invigilator to explain them to you before you start.**
- **Answer all the questions on the separate answer sheet provided.**

1. People worship God because\_\_\_\_\_

- A. he is good and caring.
- B. he is called by different names.
- C. he has many worshippers.
- D. he is worshipped by our parents.

2. Which of the following is the holy book for the Hindus?

- A. Koran
- B. Bible
- C. Gita
- D. Torah

3. When Jesus told his disciples you are the light of the world he meant

- A. they should teach the truth
- B. they should be kind
- C. they should be forgiving
- D. they should be thankful

4. Which of these men was the priest whose sons were dishonest?

- A. Aaron
- B. Moses
- C. Eli
- D. Jacob

5. The bible teaches you to \_\_\_\_\_ your father and mother.
- A. heat
  - B. disobey
  - C. disrespect
  - D. obey
6. Believing things that you have not seen yet is having \_\_\_\_\_
- A. Christianity.
  - B. religion.
  - C. faith.
  - D. word of god.
7. What ordinary thing can one do to help the orphans?
- A. give them clothes.
  - B. punish them.
  - C. buy them cars.
  - D. tease them.
8. The parable of the prodigal son teaches us \_\_\_\_\_
- A. forgiveness
  - B. hatred
  - C. faithfulness
  - D. honesty
9. Why did the Israelites leave Egypt?
- A. They wanted to migrate.
  - B. There was a famine in Egypt.
  - C. There were plagues in Egypt.
  - D. God wanted to free them from slavery.
10. Simon Peter's brother was \_\_\_\_\_
- A. Andrew
  - B. James
  - C. John
  - D. Luke
11. David was a good leader but he misused his power when he \_\_\_\_\_
- A. became king.
  - B. killed Goliath.
  - C. played the harp.
  - D. he took another man's wife.

12. A person's body is described in the bible as \_\_\_\_\_.
- A. a beautiful building.
  - B. the temple of God.
  - C. Family of God.
  - D. the Saul.
13. What kind of people do you expect to see at Kapota School in Masvingo?
- A. the crippled people.
  - B. the blind.
  - C. the mentally retarded people.
  - D. the elderly people.
14. Who spread Christianity in Africa?
- A. missionaries
  - B. Explorers
  - C. Pioneer
  - D. Traders
15. People who represent their countries in another country are called \_\_\_\_\_
- A. citizens
  - B. refuges
  - C. ambassadors
  - D. expatriates
16. Amongst the three representatives of Cecil John Rhodes in the Rudd Concession \_\_\_\_\_ was fluent in Ndebele language.
- A. Rockford Maguire
  - B. Rev. Charles Helm
  - C. Thompson
  - D. Charles Rudd
17. Money deducted from a worker's salary at the end of the month is called
- A. net income
  - B. sales tax
  - C. pay as you earn
  - D. execute duty
18. Pastoralists are people who \_\_\_\_\_
- A. depend on herding cattle .
  - B. move from place to place.
  - C. like hunting.
  - D. like gathering fruits.

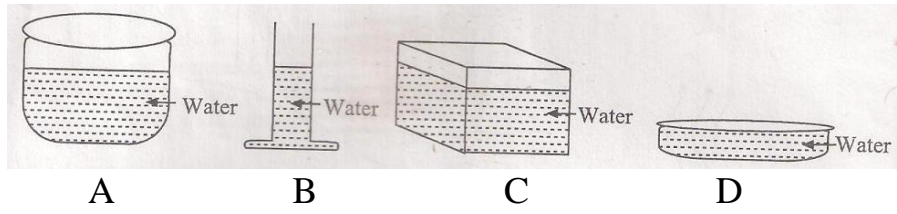
19. The Shona and the Portuguese traded in\_\_\_\_\_
- A. guns and food
  - B. beer and wine
  - C. diamonds and rhino horns.
  - D. clothes, gold and beads
20. A branch of the United Nations which looks at the Welfare of refugees is
- A. UNICEF
  - B. UNESCO
  - C. UNHCR
  - D. WHO
21. Who is responsible for providing accommodation in towns and cities?
- A. government
  - B. town or city councils
  - C. housing cooperative
  - D. minister
22. We find igloos as shelter in \_\_\_\_\_.
- A. very cold regions.
  - B. in warm climatic areas.
  - C. very hot regions.
  - D. desert areas.
23. The counting of people is called \_\_\_\_\_ .
- A. population
  - B. census
  - C. survey
  - D. voting
24. The latest improvement in the communication system is the use of \_\_\_\_\_ .
- A. telephone
  - B. telegram
  - C. satellite
  - D. radio
25. Animal skins are made soft by\_\_\_\_\_.
- A. sheering
  - B. spinning
  - C. weaving
  - D. tanning

26. Magistrates and judges work under the \_\_\_\_\_ arm of government.
- A. legislative
  - B. administrative
  - C. executive
  - D. judiciary
27. The two types of law are \_\_\_\_\_
- A. civil and criminal.
  - B. rape and theft.
  - C. divorce and murder.
  - D. courts and police.
28. What is the main cause of the shortage of houses in urban areas?
- A. sufficient space
  - B. few builders
  - C. increase in population
  - D. urban – rural migration
29. What do you expect to find in the commercial area of the city?
- A. offices and shops.
  - B. residential houses
  - C. industries and camps.
  - D. warehouses and houses.
30. A tsetse fly causes \_\_\_\_\_ in cattle?
- A. sleeping sickness
  - B. foot and mouth
  - C. gout
  - D. nagana
31. Which of the following does not dissolve in water?
- A. paraffin
  - B. soap power
  - C. salt
  - D. sugar
32. Animals which feed on twigs and leaves are \_\_\_\_\_
- A. grazers
  - B. predators
  - C. browsers
  - D. carnivores

33. Which one is a type of grass?

- A. millet
- B. sugar cane
- C. rapoko
- D. runner

**STUDY THE FOUR CONTAINERS BELOW CAREFULLY AND ANSWER QUESTIONS 34 AND 35**

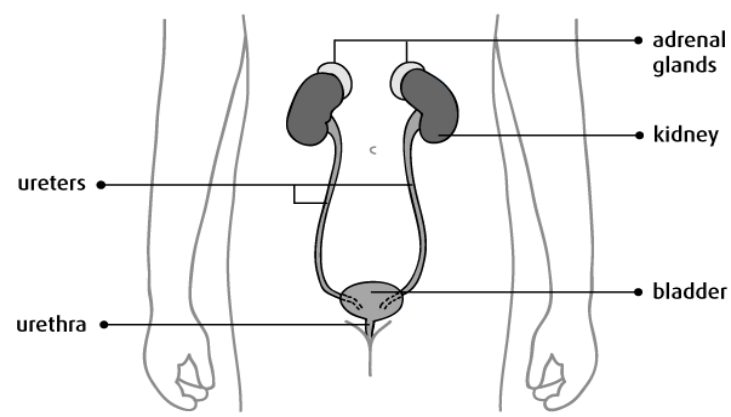


34. From which container would water evaporate slowest?

35. The four containers clearly show that \_\_\_\_\_

- A. water can take the shape of any container.
- B. water can be made soft.
- C. the amount of water depends on the shape of the container.
- D. water boils at 100°C

**STUDY THE DIAGRAM BELOW AND ANSWER QUESTION 36 AND 37**



36. What is the main function of the kidneys?

- A. pumping blood
- B. taking in oxygen
- C. removing body waste
- D. digested food

37. Which product is stored by the bladder before it is expelled from the body?

- A. Oxygen
- B. digested food
- C. carbon dioxide
- D. urea

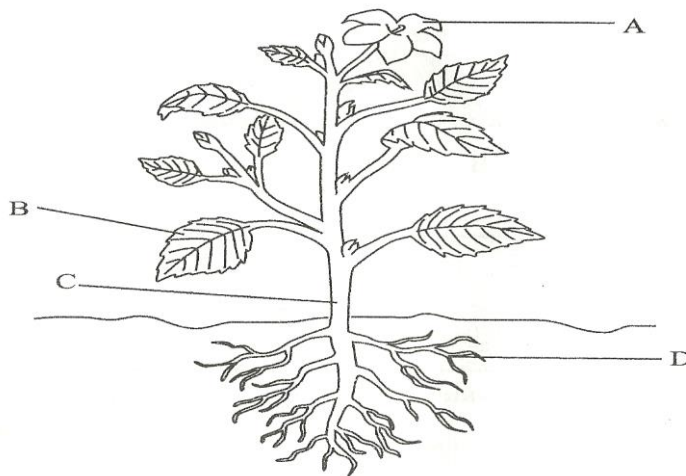
38. Which gas is given off by trees during respiration?

- A. nitrogen
- B. oxygen
- C. carbon monoxide
- D. carbon dioxide

39. \_\_\_\_\_ is a way of reducing friction

- A. Rubbing
- B. Grinding
- C. Greasing
- D. Gripping

**STUDY THE PICTURE BELOW AND ANSWER QUESTION 40**



40. Which part of the plant makes its food? B

41. Which part of the body do the sexually transmitted infection diseases infect?

- A. genitals
- B. head
- C. legs
- D. mouth

42. Why do motorcars have rough tyres?
- A. to run faster along the road.
  - B. to move slowly along the road.
  - C. to show its form on the road.
  - D. to give a good grip on the ground.

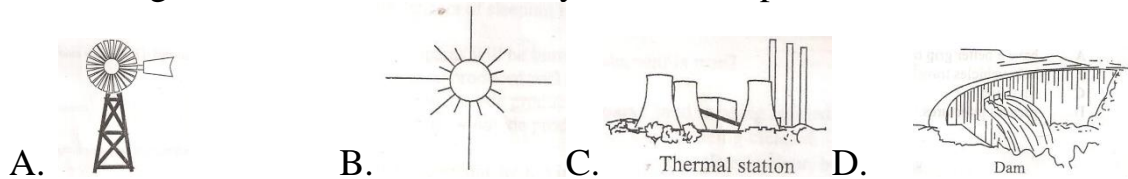
43. Which of the following is correctly paired?

	<u>System</u>	<u>Organ</u>
A.	digestive_____	stomach
B.	respiratory_____	uterus
C.	circulatory_____	trachea
D.	reproductive_____	liver

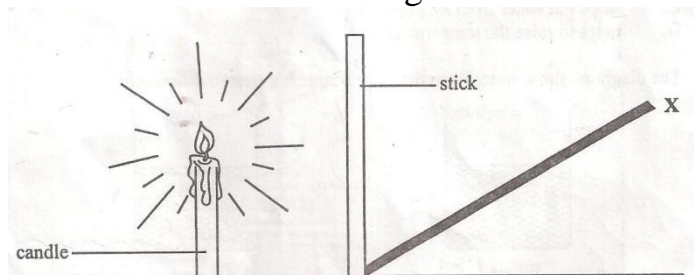
44. The importance of lightning conductors is to \_\_\_\_\_

- A. decorate building.
- B. strike building.
- C. send back lightning.
- D. protect buildings from lightning.

45. Which diagram shows the source of hydro-electric power?



46. What is X in the below diagram?




- A. reflection
- B. image
- C. mirage
- D. shadow

47. The disintegration of rocks to form soil is known as \_\_\_\_\_.

- A. soil erosion
- B. photosynthesis
- C. soil formation
- D. weathering



48. The following sign was seen on a care label of a garment what does it mean?

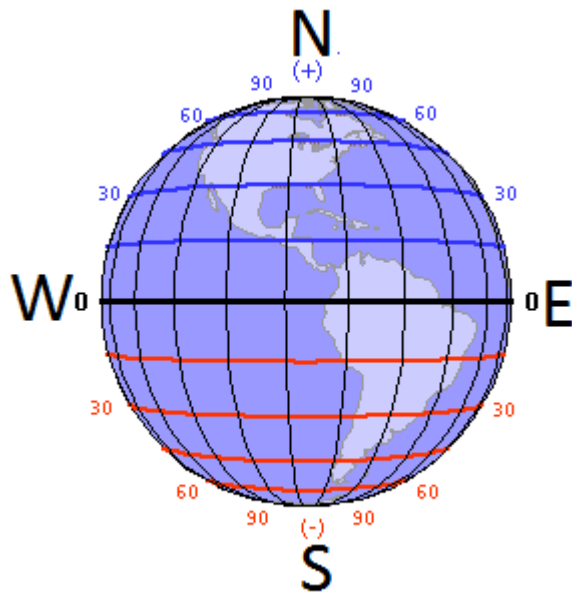


- A. do not iron
- B. warm iron
- C. ironing
- D. bleaching

49. An animal which can live both in water and on land is known as

- 
- A. a mammal
  - B. a fish
  - C. an amphibian
  - D. a reptile

**STUDY THE DIAGRAM BELOW AND ANSWER QUESTION 50.**



50. What name is given the line of latitude marked WE?

- A. Equator
- B. North Pole
- C. South Pole
- D. Greenwich meridian