

GENERAL PAPER PRACTICE 1
GRADE 7 EXAMINATION 2020

GENERAL PAPER
PAPER 2

31 AUGUST 2020

Time: 1 hour 30 min

INSTRUCTIONS TO CANDIDATES

Section A

Answer question **1** and any **two** other questions. Write your answers in the spaces provided on the question paper.

Section B

Answer any **three** questions. Write your answers in the spaces provided on the question paper.

Section C

Answer any **three** questions. Write your answers in the spaces provided on the question paper.

FOR EXAMINER'S USE	
Section A	
1	
2	
3	
4	
Section B	
5	
6	
7	
8	
9	
Section C	
10	
11	
12	
13	
TOTAL	

This question paper comprises 8 printed pages.

Copyright: Zimbabwe Republic Police Education Section 2012

Section A

Answer question **1** and any **two** other questions. Write your answers in the spaces provided on the question paper.

Read the following passage and answer questions that follow

Pamela Moyo was a leader of a local church. One night she had a vision in which she was told that an important church official would visit her on the following day at one o'clock. She thoroughly prepared her home and prepared nice food for her visitor. At exactly one o'clock on the following day, a local beggar called Nhamo came. Pamela was very angry on seeing this dirty visitor, she chased him away and refused to give him some water. On the following night Pamela had a vision in which she was accused of chasing away a church official who had come to visit her. Pamela was told that whatever she does to anyone, it was just as good as having done it to the Almighty.

1a) Who was Pamela?

----- (1)

b) According to the passage a vision is like a

----- (1)

c) If you were Pamela what would you do to Nhamo?

----- (1)

d) Why is it good to welcome any visitor?

----- (1)

2 a) What is a parable?

----- (1)

b) Why did Jesus teach in parables?

----- (1)

c) Name any parable you know and what it teaches?

----- (1)

----- (1)

d) How old was Jesus when he was crucified?

----- (1)


3 a) Which religion was started by Mohammed Ali ?

------(1)

b) Mahatma Gandhi is respected in which religion?

------(1)

c) Which religion treat this animal as a sacred animal?



------(1)

d) Hindus worship in a ----- without chairs or benches. (1)

e) In which city did Mother Theresa start a home for the unwanted?

------(1)

4 a) In which mountain was Moses given the ten commandments?

------(1)

b) Which commandment help to reduce the spread of HIV?

------(1)

c) Give any two plagues that came to Egypt when Pharaoh refused to release the Israelites.

------(1)

------(1)

d)Who was Moses' brother who assisted him in his mission to free the Israelites from slavery?

----- (1)

Section B

Answer any **three** questions. Write your answers in the spaces provided on the question paper.

5 a) How many heroes started the second Chimurenga at Chinhoyi in 1966?

------(1)

b) When was the Unity Accord signed between PF ZAPU and ZANU PF.

------(1)

c) Name the two political leaders who signed the Unity Accord?

------(1)

------(1)

d) What is Zimbabwe's responsibility in the SADC?

------(1)

6 a) Give one reason for cooking food.

------(1)

b) One method of cooking is

------(1)

c) What is the purpose of dietary fibre or roughage in our meals.

------(1)

c) What is a balanced diet?

------(2)

7 a) To which arm of government would you classify prosecutors, lawyer, judges and magistrates?

------(1)

b) Which of the three arms of the government consists of the President and Cabinet ministers?

-----(1)
d) Which court of law tries very serious offences like murder ?

-----(1)
e) Who chooses the president in a country like Zimbabwe?

-----(1)
f) Who makes the laws in the country?

----- (1)

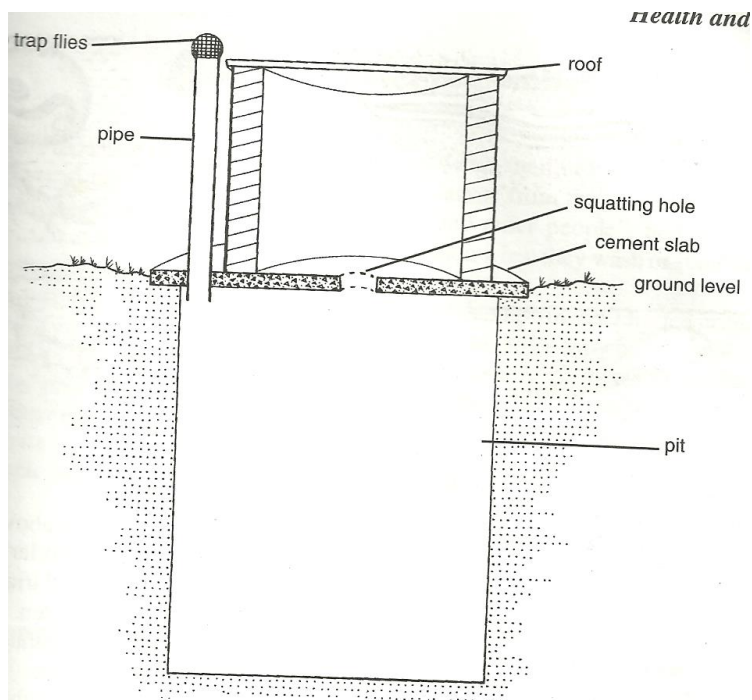
8 a) Why do people need shelter?

-----(1)
b) Name any two modern building materials that are used for constructing sky
scrapers?

----- (2)

c) What type of toilet is shown below?

-----(1)



(d) How does this type of toilet help to control the spread of diseases like cholera and diarrhoea?

- (1)
- 9 a) One natural fibre used for making clothes is
- (1)
- b) We get nylon from which mineral?
- (1)
- c) Fire proof clothes are made from
- (1)
- d) Give two reasons why people wear clothes?
-
- (2)

Section C

Answer any **three** questions. Write your answers in the spaces provided on the question paper.

10. a) Give any two changes that occur in girls during puberty.
- (i)----- (1)
- (ii) ----- (1)
- b) Name any two sexually transmitted infections that cannot be cured.
- (i) ----- (1)
- (ii) ----- (1)
- c) Name two child killer diseases that affect the lungs
- (i)----- (1)
- (ii)----- (1)
- d) The best way to avoid STDs is to
- (1)

11. a) What is meant by hydro?

------(1)

b) Where in Zimbabwe is hydro electricity made?

------(1)

c) Where in Zimbabwe is the main thermal power station?

------(1)

d) What is the purpose of a fuse in the three pin plug?

------(1)

e) Give an example of an electric appliance.

------(1)

f) Which fuel is used in Zimbabwe's thermal power stations?

------(1)

g) Give an example of a good conductor of electricity.

------(1)

12.a) How long does the earth take to rotate once

------(1)

b)The earth rotates on its axis in an oval route called the

------(1)

c) Name the simple machine that can be used to open a tin of beans.

------(1)

d) Zimbabwe has many landforms. Name only four you know.

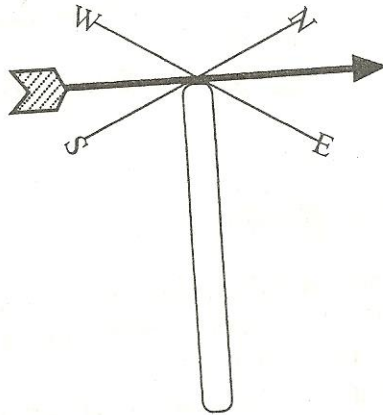
(i)------(1)

(ii)------(1)

(iii)------(1)

(vi) -----(1)

13. The diagram below shows a wind vane.



- a) From which direction is the wind blowing?
-----(1)
- b) Name the instrument used for measuring wind speed.
-----(1)
- c) How does wind move?
-----(1)
- d) Give an example of a wind-powered machine.
-----(1)
- e) Name two winds that bring rain to Zimbabwe?

----- (2)
- f) What is the normal body temperature of a person?
-----(1)

