

## Section A

Answer question 1 and any **two** other questions. Write your answers in the spaces provided on the question paper.

Read the following passage and answer questions that follow

Musa and Tendai were best friends. One day Tendai took Musa's watch. It was a very nice watch that Musa got on his birthday as a present from his father. Tendai tried to put it on his hand. Unfortunately the watch broke into pieces. Their friendship broke for a while. Musa failed to accept what happened since the watch was just a day old.

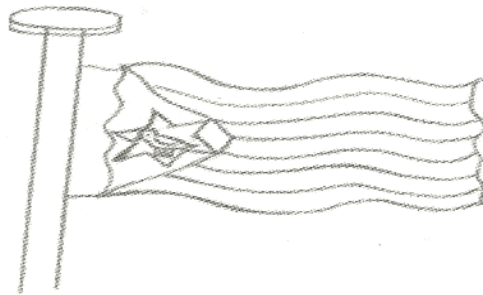
- 1a) What caused the friendship to break?  
(1)
- b) If you were Tendai what were you going to do? (1)
- c) Did Musa do the right thing to the friendship?  
(1)
- d) What should Musa do about the friendship?  
(1)
- 2 a) What is a parable? (1)
- b) Why did Jesus use parables in his teachings?  
(2)
- c) In the parable of the sower the seed stands for  
(1)
- d) We should be like seeds that fell on....  
(1)
- 3 a) Which two religions do not allow their followers to eat pork? (2)
- b) Who wrote the first five books of the Old Testament?  
(1)
- c) Jews worship in a (1)
- d) Which religion does not have a holy book? (1)
- 4 a) Jesus entered Jerusalem riding on a  
(1)
- b) In which garden was Jesus arrested?  
(1)
- c) When do Christians remember the death of Jesus?  
(1)
- d) Who was swallowed by a fish for three days before he was vomited alive?  
(1)
- e) Who was David's best friend?



## Section B

Answer any **three** questions. Write your answers in the spaces provided on the question paper.

Study the picture below and answer questions which follow.



5 a) What do the following represent on the National Flag?

- (i) White triangle (1)
- (ii) Black colour (1)
- (iii) Zimbabwe bird (1)
- b) Name one National Holiday that is celebrated in August each year. (1)
- c) What was the colonial name for Zimbabwe? (1)

6 a) When using the road as a pedestrian which side of the road should you use and

why?(1)

- b) At a zebra crossing line, how many times should you look to your right before crossing the road ? (1)
- c) Which side of the road should a cyclist use? (1)

d) What does an amber robot mean to a motorist? (1)

7 a) When attending a funeral what colour of clothes should we put on?

(1)

b) What is the reason for ironing clothes?

(1)

c) In Zimbabwe the most famous textile industries are situated in which town?

(1)

d) State any two reasons for wearing clothes. (2)

8 a) What is a budget?

(1)

b) Buying and selling by exchanging goods for a goods is called.....

(1)

c) Wealth is a measure of resources. State any three items that make up the wealth of a community.

(3)

9 a) Define the following terms

(i) Work

(1)

(ii) Leisure

(1)

b) Write down two hunting tools that were used by the bushmen.

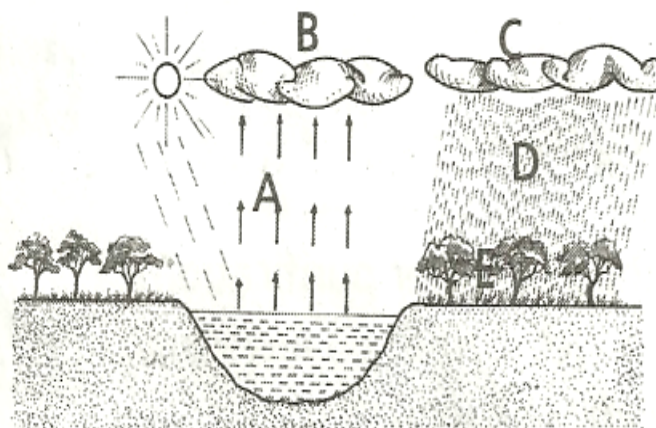
(2)

c) Which medal is given as the first prize at the Olympic games?

(1)

### Section C

Study the diagram below and answer questions which follow.



10 (a) State the source of energy that causes evaporation in the diagram above.

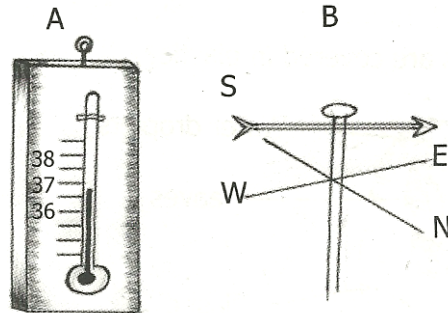
(1)

(b) At which letters are the following processes taking place?

- (i) Evaporation (1)
  - (ii) Cloud formation (1)
  - (iii) Rain Falling (1)
  - (iv) Condensation (1)
  - (v) Water follows back to the dam----- (1)
- (c) Below zero is freezing point . What happens to water left in at such temperatures?

(1)

Study the diagram below and answer questions which follow.



11. a) What is the temperature reading at the moment?

(1)

b (i) Name the diagram marked A and B

(2)

(ii) What is instrument B used for? (1)

c) (i) When Earth revolves around the sun what does this cause?

(1)

(ii) When Earth rotates on its axis what does this cause?

(1)

(iii) How many days does the Earth take to complete one revolution? (1)

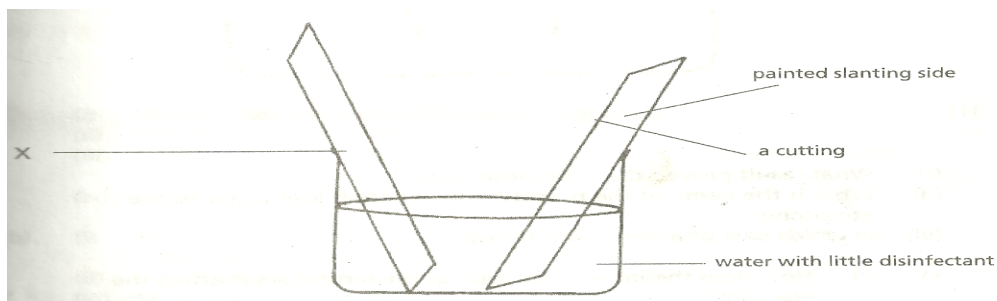
12. Use the picture below to answer questions that follow.



a) Give the name of the above landform.

- b) What led to the formation of the above feature? (1)
- c) In a soil profile which soil layer is made of the remains of living things? (1)
- d) List down any two ways of preventing soil erosion? (2)
- 13. a) Give an example of a tree that can be grown from the following:
  - (i) Cuttings (1)
  - (i) Seeds (1)
  - (i) Shoots (1)

The diagram below shows two cuttings that have been put in a jar of water before planting. Study it carefully before you attempt to answer questions that follow.



- b) When handling fresh cutting why must one avoid skin contact with the juice of the cutting?(1)
- c) (i) Explain why cuttings are put in water before planting. (1)
  - (i) Why is a little disinfectant added in the water? (1)
  - (ii) Why are most leaves removed from a cutting? (1)

### GRADE 7 EXAMINATION 2020 General Paper 2 Answers

- 1a) the breaking of the watch
- b) I would appologise
- c) No
- d) He should forgive his friend
- 2a) An earthly story with a spiritual meaning
- b) to enable his listeners to understand his teachings easily
- c) the word of God
- d) good soil
- 3a) Islam and Judaism
- b) Moses



- c) Synagogue
- d) African Traditional Religion
- 4a) donkey
- b) Gethsemane
- c) Good Friday
- d) Jonah
- e) Jonathan
- 5a) i peace
- ii native black people of Zimbabwe
- iii National emblem
- b) Heroes Day / Defense Forces Day
- c) Rhodesia
- 6a) Right hand side so that you face oncoming traffic
- b) at least twice
- c) left side
- d) prepare to stop
- 7a) black
- b) to remove creases/ kill lice
- c) Kadoma
- d) privacy, protection against bad weather etc
- 8a) planned use of money.
- b) barter trade
- c) i natural resources in the area
- ii buildings in the community
- iii knowledge and skills in the local people
- 9a) i What people do to earn a living.
- ii What people do to pass time.
- b) i bows
- ii arrows
- c) gold medal
  
- 10 a) sun
- b) i A
- ii B
- iii D
- iv C
- v E
- c) it becomes ice
- 11a) 36.75<sup>0</sup> C
- b) i thermometer
- ii windvane
- iii measuring wind direction
- c) i seasons of the year
- ii days and nights



- iii 365 days
- 12a) gulley
  - b) soil erosion
  - c) top soil
  - d) i avoid stream bank cultivation
    - ii ploughing across slopes etc
- 13a) i mulberry/ blood wood etc
  - ii mango, musasa etc
  - iii banana, sisal etc
- b) some cuttings have poisonous juice
- c) i so that they suck enough water to use before they develop roots
  - ii to kill germs which may cause the cutting to rot
  - iii to reduce transpiration

