

RG MUGABE PRIMARY SCHOOL
END OF TERM 3 EXAM

Section A

There are **four** questions in this section.

Answer question **1** and any other **two** questions in the spaces provided on the question paper.

1. Read the following passage and answer the questions, which follow:

Gabriela and her husband had been Christians but when their baby died, they left church. Relatives had told them that God was angry with them that is why they lost their baby. They were later invited to rejoin the church by a pastor but they refused.

Gabriela fell seriously ill and spent weeks in hospital in great pain. After a difficulty surgery, she went home still in pain. She prayed and asked God to forgive her and allow her to live then she would serve the Lord. She completely recovered. Gabriela, her husband and her mother were baptised. Gabriela and her husband are now busy telling others about God and have vowed never to leave God again.

(a) Why did Gabriela and her husband leave the church?

_____ (1)

(b) If you were in the place of Gabriela and her husband what would you have done after the death of your baby?

_____ (1)

(c) What made Gabriela and her husband rejoin the church?

_____ (1)

(d) How did Gabriela and her husband serve God after Gabriela's complete recovery?

_____ (1)

Total [4]

2(a) Where did Jesus meet the Samaritan woman?

_____ (1)

(b) What did Jesus ask for from the Samaritan woman?

_____ (1)

(c) What two things did Jesus mention to the Samaritan woman about the worship of God?

_____ (2)

(d) What kind of relationship existed between the Jews and the Samaritans?

_____ (1)

Total [5]

3. (a) Who were the two Roman Governors who tried Paul in Caesarea?

_____ (2)

(b) On which Island was Paul bitten by a snake?

_____ (1)

(c) Where was Paul going to when he heard Jesus speaking?

_____ (1)

(d) Who was sent to open Paul's eyes?

_____ (1)

Total [5]

- 4(a) What happened at Pentecost? _____(1)
- (b) Which people worship in a Mosque? _____(1)
- (c) Who is the mediator between God and people in the African Traditional Religion? _____(1)
- (d) Name one duty of the Holy Spirit. _____(1)
- (e) When Jesus was baptised, in what form did the Holy Spirit descend upon him? _____(1)

Section B

There are **five** questions in this section.

Answer any **three** questions in the spaces provided on the question paper.

5(a) Give any two rights which the Rudd Concession gave to the British South Africa Company.

_____ (2)

(b) Who was the ZANLA military chief who was killed in an accident in 1979? _____(1)

(c) What does the Africa Union (A.U) do? _____(1)

(d) Where is the Headquarters of the Africa Union (A.U)? _____(1)

Total [5]

6(a) What is food? _____(1)

(b) Give any **one** function of proteins in our bodies. _____(1)

(c) Name any two parts of our bodies, which needs Vitamin A. _____(2)

(d) A disease caused by lack of carbohydrates is _____(1)

Total [5]

7(a) Which people use an igloo for shelter? _____(1)

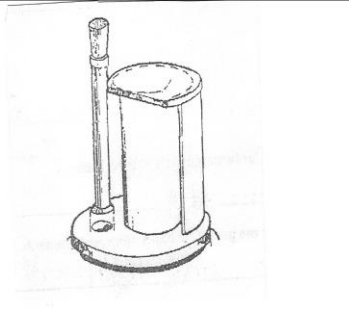
(b) What name is given to buildings found in the industrial area? _____(1)

(c) Give any **two** reasons for the shortage of accommodation in urban areas? _____(2)

(d) A wigwam is a shelter for _____(1) Total [5]

8(a) What is the danger of consuming food items which have expired?
_____ (1)

(b) This type of toilet is found mainly in the rural areas.



What is it called?
_____ (1)

(c) Drugs may be taken into the body through several ways. Name any **two** of these ways.

_____ (2)

(d) Name any one drug commonly abused by teenagers.
_____ (1)

Total [5]

9(a) The table shows some measuring instruments. Complete the table by matching the instruments with the uses given below the table. An example has been given.

INSTRUMENTS	USES
E.g. Wind vane	Direction of wind
Barometer	
Hygrometer	
Thermometer	

[3]

Uses

- Temperature
- Amount of moisture
- Air pressure
- Direction of wind

(b) NGOs is an abbreviation. Write it in full.
_____ (1)

(c) Name any **one** Voluntary Organisation.
_____ [1]

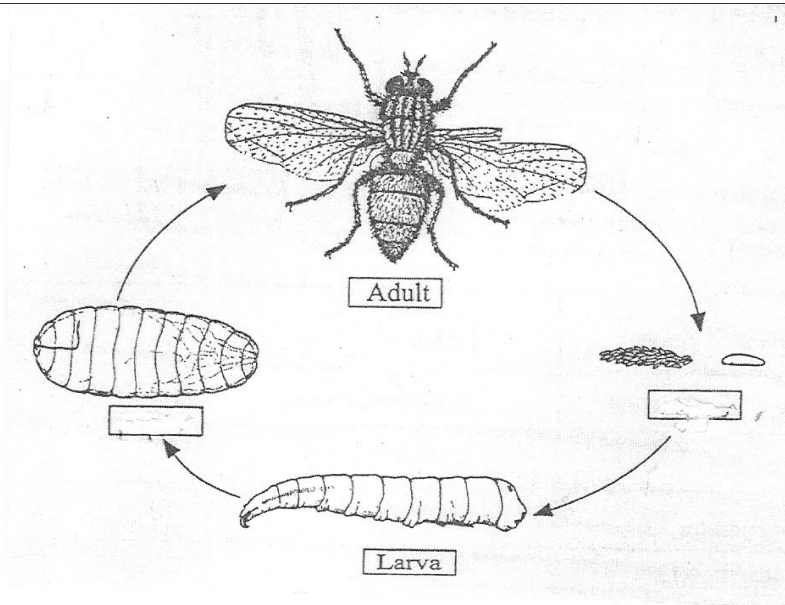
Total [5]

Section C

There are **four** questions in this section.

Answer any **three** questions in the spaces provided on the question paper.

10(a) The diagram below shows the life cycle of a house fly



Two stages have been named; write the names of the other two stages in the empty boxes.

(b) How do houseflies spread diseases?

[1]

(c) Name any **two** diseases spread by a housefly.

[2]

(d) Name one parasite, which feeds on cattle blood.

[1]

(e) What is destroyed by the AIDS virus in the body?

[1]

Total [7]

11(a) Name any two actions that result in friction.

(i) _____

(ii) _____ [2]

(b) Suggest any two ways in which friction can be useful.

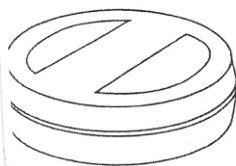
[2]

(c) Give one way in which the ground can be protected from the dangers of friction.

[1]

(d)

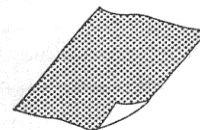
a)



Polish



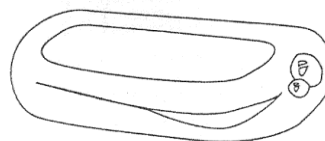
Vaseline



sandpaper



School rubber



Soap

Which two of the illustrations above increase friction?

_____ [2]

Total [7]

12(a) Name any **two** uses of trees.

_____ [2]

(b) What is a woodlot?

_____ [1]


(c) How can you know the age of a tree?

_____ [1]

(d) Trees respire. What is to respire?

_____ [1]

(e)



(i) Which of the above trees will produce better planks for timber?

_____ [1]

(ii) Explain why?

_____ [1]

13(a) What is a habitat?

_____ [1]

(b) What is a territory for an animal within a habitat?

_____ [1]

(c) What has reduced animal population? Give any two reasons.

(i) _____ [1]

(ii) _____ [1]

(d) What word is used to indicate that an animal or bird is out of existence?

_____ [1]

(e) Name any **one** endangered species in Zimbabwe.

_____ [1]

(f) What name is given to the long hair around the neck of a lion?

_____ [1]

Total [7]