

**RG MUGABE PRIMARY SCHOOL  
GRADE SEVEN GENERAL PAPER 2**

**Section A**

*Answer all questions and any other two. Write neatly.*

**Section B**

*Answer any three questions*

**Section C**

*Answer any three questions*

**SECTION A**

*There are four questions in this section. Answer any question one and any other two.*

1. Read the following passage and answer the questions which follow

The family is at the heart of the teaching of many religions in Zimbabwe. Muslims start teaching their children from an early age. Jews and Hindus also do the same. Children are taught to obey God and their parents. Families look after one another, care for each other and support each other. All this is important if the family is to become a basic human community.

- a) Which religion is mentioned in the story teaches about children to their children from an early age? [1]
  - b) Give one important thing the families must do to each other [1]
  - c) Muslims use.....as their Holy Book. [1]
  - d) What should you do to show obedience to family [2]
- 2.
- a) A church is a ..... [1]
  - b) Name any two disciples of Jesus [2]
  - c) Prophet Mohammed's wife was ..... [1]
  - d) Children of Jews are taught about religion at the .....[1]
- 3.
- a) How many commandments were given to Moses? [1]
  - b) Israelites lived as slaves in a country called..... [1]
  - c) List down any two plagues which King Pharaoh's nation faced [1]
  - d) What did Moses do for the Israelites to cross the Red Sea from Egypt? [1]
- 4.
- a) Mother Theresa is known for..... [2]
  - b) Why do Moslems remove their shoes when entering their Mosque? [1]
  - c) We are equal in God's sight. This is because we are all ..... [1]
  - d) How was Stephen in the Bible killed? [1]

**SECTION B**

*There are five questions in this section. Answer any three*


- 5.
- a) What can you use to transport flowers from Zimbabwe to Europe? [1]
  - b) Where is water transport commonly used in Zimbabwe? [1]
  - c) The latest improvement in telephone communications is the use of ..... [1]
  - d) The money you actually receive after taxation at the end of the month is [1]
  - e) During inflation prices..... [1]
6. a) Study the food square block
- I. What is the missing food group? [1]
  - II. Give any two examples of foods that give us proteins? [2]
- |      |          |
|------|----------|
| ?    | Proteins |
| Fats | vitamins |
- b). What do we call a diet which contains all the four food groups shown above? [1]

- c) What disease can be caused by lack of proteins especially in babies? [1]
7. a) Why do countries have laws? [1]  
 b) Who makes the national laws in Zimbabwe? [1]  
 c) What name is given to the committee to which government ministries belong? [1]  
 d) What happens to people who have broken the law? [1]  
 e) Who enforces the laws made by the parliament? [1]
- 8a. What were some of the earliest clothes worn? [1]  
 8b. In which country in Southern Africa do people wear woolen blankets as part of their national costume? [1]  
 8c. Nylon is made from .....and ..... [2]  
 8d. Where is silk obtained from? [1]
9. a) The three arms of government are: i).....  
 ii).....  
 iii)..... [3]  
 b) What is the best means of transporting bulky and very heavy goods? [1]  
 c) Areas which members of parliament represent are known as ..... [1]

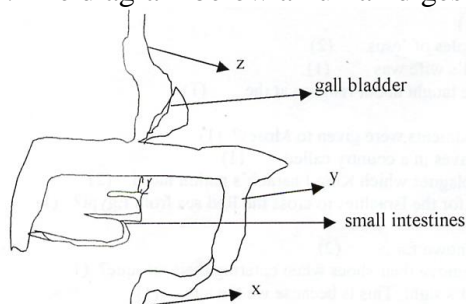
**SECTION C**

*There are four questions in this section. Answer any three*

10. The diagram below shows a soil profile



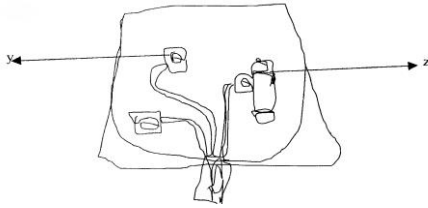
- a) What is the layer of soil represented by W? [1]  
 b) After the subsoil comes X. what is X? [1]  
 c) In fig 1, where do we find humus? [1]  
 d) Name any two major causes of soil erosion [2]  
 e) Which type of soil has a coarse texture? [1]  
 f) Write one way of preventing soil erosion [1]
11.  
 a) Trees that are natural to the country are called..... [1]  
 b) Trees that lose their leaves during winter are ..... [1]  
 c) When is the national tree planting day in Zimbabwe? [1]  
 d) Why should we care for our forests? [1]  
 e) Give an example of ; i) a hardwood tree  
 ii) a softwood tree [2]
12. The diagram below a human digestive system.



- a) What is the part labeled Z? [1]

- b) The part labeled Y is called..... [1]
- c) Undigested material passes through X. what is X? [1]
- d) Undigested waste material is called..... [1]
- e) The liquid found in the mouth is called..... [1]
- f) Give two examples of energy giving foods. [1]

13.



- a) On a domestic wall plug, the colour of the live wire is..... [1]
- b) The pin marked y is the ..... [1]
- c) Fig. 3. shows a domestic electric plug. Z is a..... [1]
- d) Another name for two or more cells connected together is..... [1]
- e) Zimbabwe's thermal power station is at..... [1]
- f) What drives turbine at
  - i) a thermal power station
  - ii) a Hydro power station [2]