

Candidate Name

Centre Number

Candidate Number

--	--	--

NYANGA DISTRICT EXAMINATIONS

GENERAL PAPER 2

MARCH 2019

TIME: 1 HOUR 30 MINUTES

INSTRUCTIONS TO CANDIDATES

Section A

Answer question **1** and any **two** other questions. Write your answers in the spaces provided on the question paper.

Section B

Answer any **three** questions. Write your answers in the spaces provided on the question paper.

Section C

Answer any **three** questions. Write your answers in the spaces provided on the question paper.

FOR EXAMINER'S USE	
Section A	
1	
2	
3	
4	
Section B	
5	
6	
7	
8	
9	
Section C	
10	
11	
12	
13	
TOTAL	

Section A

There are **four** questions in this section.

Answer question 1 and any two other questions. Write your answers in the spaces provided under each question .[14Marks].

1. Read the passage carefully and answer questions that follow.

The Headmaster's Advice

One evening near the end of the Second Term, Chantel told Tatenda and Takudzwa that the headmaster wanted to see them. They wondered which of their mischief had been found out. Mr Mazambani had warned them about their mischief several times.

The headmaster was not angry but very serious. He wanted to speak to them before they went home. They had been punished several times during the term for breaking school rules. Mr Mazambani said this could not go on.

“Rules are not made for the pleasure of making them, but for very good reasons. They must and shall be obeyed. Those who break them will not be allowed to stay at the school. I should be very sorry if you have to leave as the school might do both of you much good. So, think it over during the holidays. Goodnight .” he said.

1 a) Why were Tatenda and Takudzwa always on punishment?

_____ [1]

b) Give one example of a school rule

_____ [1]

c) How do we know that Mr Mazambani was a very caring leader ?

_____ [1]

d) State one commandment Tatenda and Takudzwa might have been breaking.

_____ [1]

[Total : 4Marks]

Study the map of Israel below and answer questions (a) and (b)

2 (a)



a) Which river is marked **X** ?

_____ [1]

b) Suggest one activity that Simon Peter, Andrew , James and John used to do at the sea of Galilee before joining Jesus Christ ?

_____ [1]

c) In what form was the Holy Spirit when it came at Pentecost ?

_____ [1]

d) What miracle did Jesus perform at the pool of Bethsaida ?

_____ [1]

e) What do you learn from the story of four friends who took their sick friend to Jesus in Capernamum ?

_____ [1]

[Total : 5 Marks]

3 (a) Which disciple confessed that Jesus was the Messiah son of the Living God ?

_____ [1]

(b) Why was Isaiah afraid when he saw God?

_____ [1]

(c) What lesson do we learn from the parable of the **two debtors** ?

_____ [1]

(d) What is a **voyage** ?

_____ [1]

(e) Which religion believes in reincarnation ?

_____ [1]

[Total: 5 Marks]

4 (a) Which King put Daniel in a den of lions ?

_____ [1]

(b) Why did Jesus wash the disciples' feet ?

_____ [1]

(c) Do unto others what you want them do unto you. What does the golden rule above teach us? _____

_____ [1]

(d) How many copper coins did the poor widow donate ?

_____ [1]

(e) Why did Eli the priest die a disappointed father ?

_____ [1]

[TOTAL : 5 Marks]

SECTION B

Answer any three questions in this section.

5. Use the map of Southern Africa below to answer questions (a to c)



5 (a) Name the SADC country marked X

_____ [1]

(b) Write the abbreviation SADC in full

_____ [1]

(c) Give one mode of transport that can be used to travel from country X to Mozambique ?

_____ [1]

(d) How did the British benefit by colonizing this country ?

_____ [1]

(e) Why was the **Unity Accord** signed on 22 December 1987 ?

_____ [1]

Total (5Marks)

6 (a) Which food nutrient do we get from pumpkins ?

_____ [1]

(b) What causes rickets ?

_____ [1]

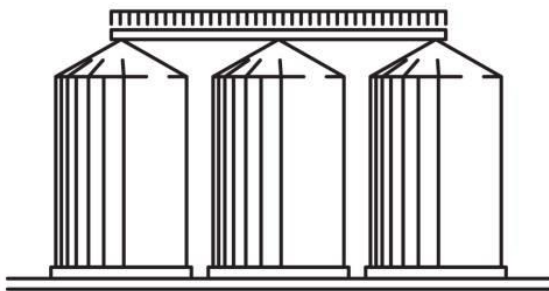
(c) State one problems faced in squatter camps.

_____ [1]

(d) The homeless are the needy members of society. Suggest one way of assisting them to move out of the streets.

_____ [1]

(e) Use the diagram below to answer question (e)



(e) What are silos used for ? _____
_____ [1]

Total (5Marks)

7 (a) Give one material manufactured in textile industries.

_____ [1]

(b) Why is cotton grown on a large scale around Gokwe and Sanyati ?

_____ [1]

(c) Give one example of protective clothing.

_____ [1]

(d) What is the currency used in Mozambique?

_____ [1]

(e) Why is it important to prepare a budget before spending money at home?

_____ [1]

Total [5Marks]

8. Read the list below and use it to answer question (a)

Untrained teacher, student nurse, qualified doctor, and a trainee electrician

(a) Name one of the above who is a skilled worker.

_____ [1]

(b) Why are practical subjects important at school ?

_____ [1]

(c) In which province do we find Great Zimbabwe ruins ?

_____ [1]

(d) Give one example of the needy people in the community.

_____ [1]

(e) How does the Red Cross assist people during peace times?

_____ [1]

Total [5Marks]

9.(a) How many colours are on the Zimbabwean National flag?

_____ [1]

Study the diagram below and use it to answer question (b)

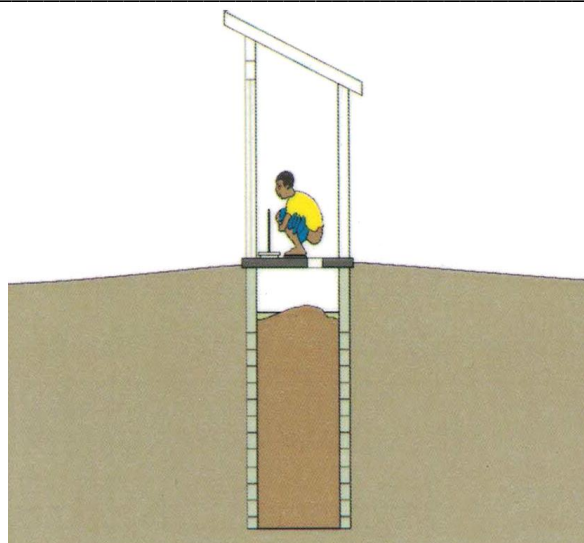


(b) Under which arm of government do we find the senators?

_____ [1]

(c) Which symbols on the National Coat of Arms stands for the movement from war to peace?

_____ [1]



(d) Name the toilet shown above.

_____ [1]

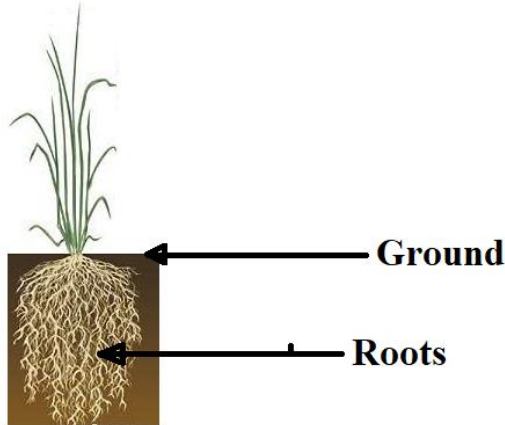
(e) Which branch of the United Nations is responsible for refugees in the World

Total [5Marks]

SECTION C

Answer any three questions from this section

10. Study the diagram below of a grass plant and answer question (a) and (b)



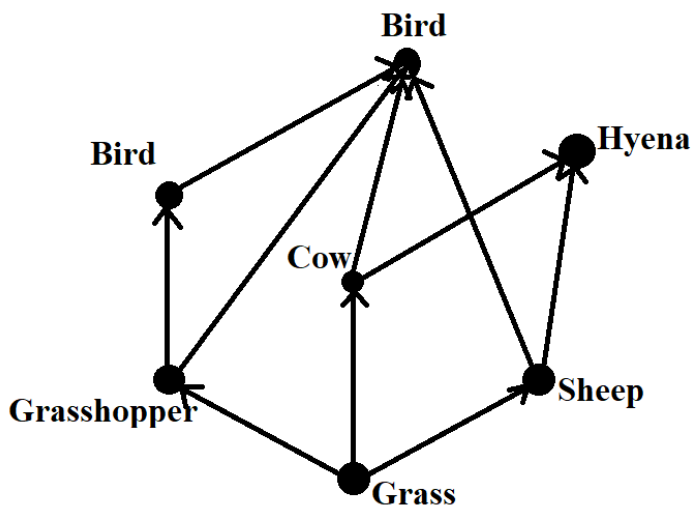
(a) Give one characteristic of the plant above which shows that it belongs to the grass family.

[1]

(b) State one food crop which belongs to the grass family.

[1]

The diagram below shows a food web



(c) Which of the above is an omnivore ?

[1]

(d) Construct one food chain from the web above.

[1]

(e) In what state is water drunk by people and animals ?

[1]

(f) What drives turbines at a hydro power station ?

[1]

(g) What is condensation ?

[1]

Total [(7Marks)]

11 (a) What is a habitat ?

[1]

(b) Give one problem faced in both woodlots and woodlands.

[1]

(c) Study the list of plants below and answer question (c)

Orange tree , maize plant , millet plant , mulberry tree , pine tree and peach tree.

Which of the plants above can be grown using both cuttings and truncheons?

[1]

(d) The experiment below shows that green plants transpire. Use it to answer question (d)



(d) Why is it wise to use a transparent plastic bag to carry out the experiment ?

[1]

(e) State one example of a Sexually Transmitted Infection (STI).

[1]

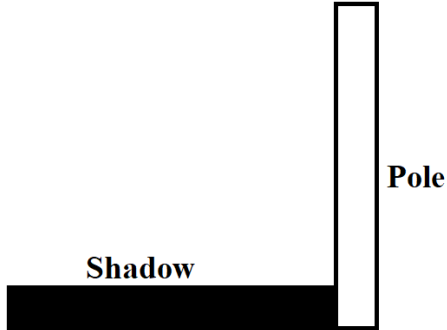
(f) Give one way of controlling the spreading of gut worms.

_____ [1]
(g) What sense is used by humans to identify the colour of clothes?

_____ [1]

Total [7 Marks]

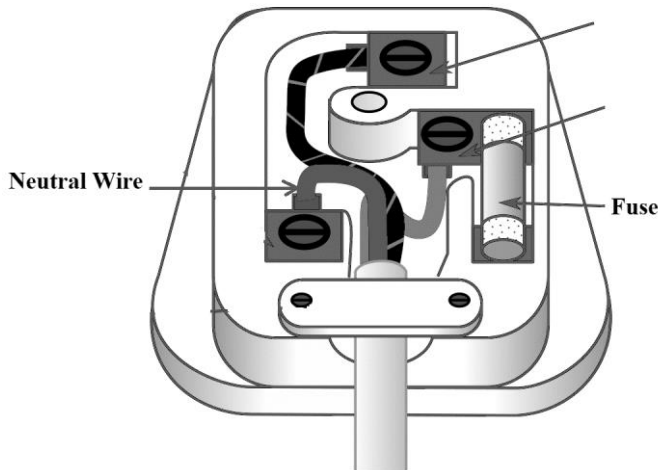
12. Study the diagram below and answer questions (a) and (b)



(a) What time of the day is shown above?
_____ [1]

(b) Give one use of solar energy.
_____ [1]

(c) The diagram below shows a three pin plug. Use it to answer questions (c) and (d)



(c) What colour is the neutral wire ?
_____ [1]

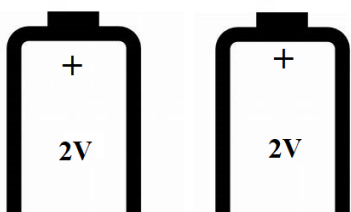
(d) Give the use of the fuse.

_____ [1]

(e) Suggest one safety precaution when using electricity.

_____ [1]

(f) Study the diagram below of a cell and answer question (f)



(f) Calculate the **total voltage** of the two cells.

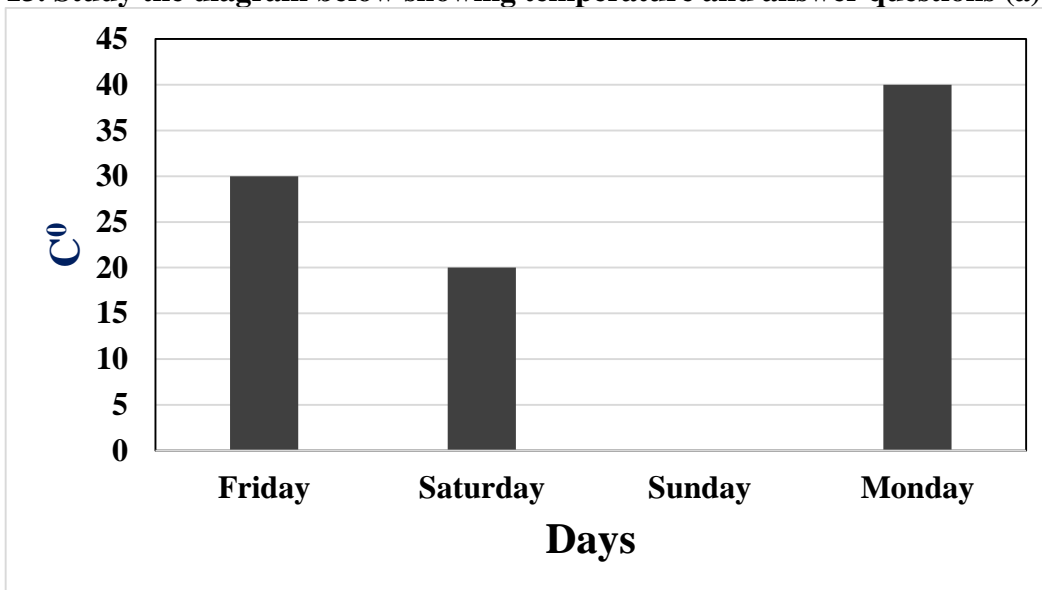
[1]

(g) Give one type of pollution.

[1]

Total (7 Marks)

13. Study the diagram below showing temperature and answer questions (a) and (b)



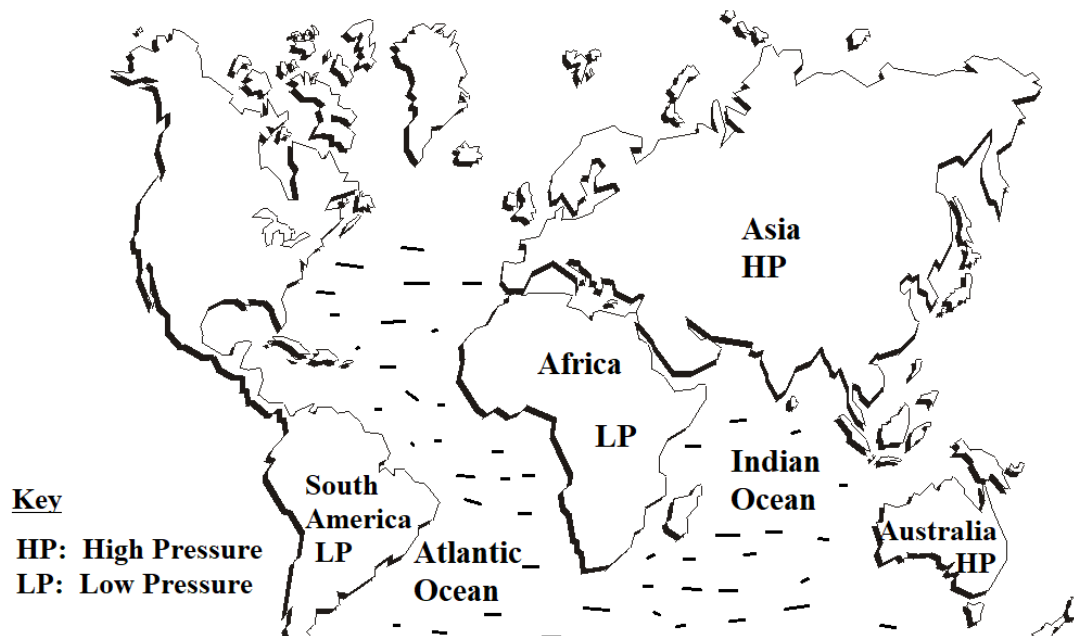
(a) What is the unit of measurement for temperature?

[1]

(b) Calculate the **average temperature** for the days shown on the graph above.

[1]

(c) The diagram below shows areas of high and low pressure. Use it to answer question



(c) Put arrows on the map to show the movement of wind, [1]

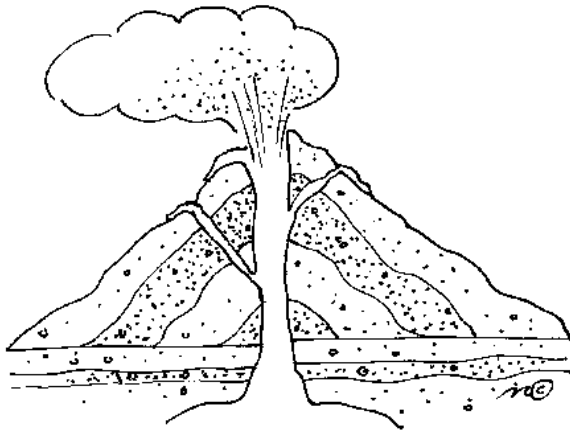
(d) How many days does the earth take to revolve around the sun?
_____ [1]

(e) Give one example of a weather hazard.
_____ [1]

(f) Suggest one way of reducing friction on door hinges.

_____ [1]

Study the diagram below and answer question (g)



(g) Which landform is shown above ?

_____ [1]

Total (7 Marks)